


ALL-STAR



BOOK







Table of Contents

Introduction.....	2
Puzzle Time #1.....	3-8
Puzzle Time #2.....	9-14
All-Star Test.....	15-20
Congratulations!.....	21
Super Secret Notes.....	22



Introduction

Awesome! You've made it to the All-Star Book, the last step in achieving your Chess Club All-Star status!

Now that you've mastered the tactics, you'll need to apply all of your chess skills to complete this challenging book, and answer all the Mate in 2's & Mate in 3's.

You know your mission! You must complete the two "Puzzle Times" prior to taking on the final task: The "All-Star Test."


Passing the "All-Star Test" will automatically launch you into "Chess Club All-Star Status." But beware: The All-Star Book is the most challenging of all books, filled with very advanced lessons and the most challenging "Puzzle Times." Turn on your Chess Brain and prepare yourself for what lies ahead!



Remember, there are a few different ways of earning points to build up your Chess Club All-Star status. In the All-Star Book, you'll find "Puzzle Times" that are worth 250 points and the "All-Star Test" which is worth an incredible 500 points!

If you've worked through all the books, and earned a total of 2000 points, you've officially become a "Chess Club All-Star." Every "Chess Club All-Star" receives an official Chess All-Star Certificate and a Chess All-Star Trophy!


Good luck to you as you complete this journey, and remember: the best way to get better at something is always to practice, so play chess as much as possible!



MATE IN












TWO'S












Puzzle Time #1

This "Puzzle Time" is worth 250 points! It's white turn to move. White can checkmate black in two moves. Write down white's moves in chess notation.

 <p>1) _____</p>	 <p>2) _____</p>	 <p>3) _____</p>
 <p>4) _____</p>	 <p>5) _____</p>	 <p>6) _____</p>
 <p>7) _____</p>	 <p>8) _____</p>	 <p>9) _____</p>










Puzzle Time #1

It's white turn to move. White can checkmate black in two moves. Write down white's moves in chess notation. (Hint: Set up a chessboard and try out the different variations).

 <p>10) _____</p>	 <p>11) _____</p>	 <p>12) _____</p>
 <p>13) _____</p>	 <p>14) _____</p>	 <p>15) _____</p>
 <p>16) _____</p>	 <p>17) _____</p>	 <p>18) _____</p>


Puzzle Time #1

It's white turn to move. White can checkmate black in two moves. Write down white's moves in chess notation. (Hint: Set up a chessboard and try out the different variations).


 <p>19) _____</p>	 <p>20) _____</p>	 <p>21) _____</p>
 <p>22) _____</p>	 <p>23) _____</p>	 <p>24) _____</p>
 <p>25) _____</p>	 <p>26) _____</p>	 <p>27) _____</p>

Puzzle Time #1


It's white turn to move. White can checkmate black in two moves. Write down white's moves in chess notation. (Hint: Set up a chessboard and try out the different variations).




28) _____




29) _____




30) _____




31) _____




32) _____




33) _____



34) _____












35) _____




36) _____

Puzzle Time #1

It's white turn to move. White can checkmate black in two moves. Write down white's moves in chess notation. (Hint: Set up a chessboard and try out the different variations).


 <p style="text-align: center;">a b c d e f g h</p> <p>37) _____</p>	 <p style="text-align: center;">a b c d e f g h</p> <p>38) _____</p>	 <p style="text-align: center;">a b c d e f g h</p> <p>39) _____</p>
 <p style="text-align: center;">a b c d e f g h</p> <p>40) _____</p>	 <p style="text-align: center;">a b c d e f g h</p> <p>41) _____</p>	 <p style="text-align: center;">a b c d e f g h</p> <p>42) _____</p>
 <p style="text-align: center;">a b c d e f g h</p> <p>43) _____</p>	 <p style="text-align: center;">a b c d e f g h</p> <p>44) _____</p>	 <p style="text-align: center;">a b c d e f g h</p> <p>45) _____</p>



MATE IN












THREE'S



Puzzle Time #2

This "Puzzle Time" is worth 250 points! It's white turn to move. White can checkmate black in three moves. Write down white's moves in chess notation.

 <p>1) _____</p>	 <p>2) _____</p>	 <p>3) _____</p>
 <p>4) _____</p>	 <p>5) _____</p>	 <p>6) _____</p>
 <p>7) _____</p>	 <p>8) _____</p>	 <p>9) _____</p>

♔♚♜♞♝♛♞♜♚♔ Puzzle Time #2 ♜♞♝♛♞♜♚♔

It's white turn to move. White can checkmate black in three moves. Write down white's moves in chess notation. (Hint: Set up a chessboard and try out the different variations).

10) _____

11) _____

12) _____

13) _____

14) _____

15) _____

16) _____

17) _____

18) _____

Puzzle Time #2

It's white turn to move. White can checkmate black in three moves. Write down white's moves in chess notation. (Hint: Set up a chessboard and try out the different variations).

19) _____

20) _____

21) _____

22) _____

23) _____

24) _____


25) _____

26) _____


27) _____

♙♚♛♜♝♞♟ Puzzle Time #2 ♞♟♚♛♜♝♞♟


It's white turn to move. White can checkmate black in three moves. Write down white's moves in chess notation. (Hint: Set up a chessboard and try out the different variations).




28) _____




29) _____




30) _____




31) _____




32) _____




33) _____



34) _____












35) _____




36) _____


Puzzle Time #2

It's white turn to move. White can checkmate black in three moves. Write down white's moves in chess notation. (Hint: Set up a chessboard and try out the different variations).


 <p style="text-align: center;">a b c d e f g h</p>	 <p style="text-align: center;">a b c d e f g h</p>	 <p style="text-align: center;">a b c d e f g h</p>
37) _____	38) _____	39) _____
 <p style="text-align: center;">a b c d e f g h</p>	 <p style="text-align: center;">a b c d e f g h</p>	 <p style="text-align: center;">a b c d e f g h</p>
40) _____	41) _____	42) _____
 <p style="text-align: center;">a b c d e f g h</p>	 <p style="text-align: center;">a b c d e f g h</p>	 <p style="text-align: center;">a b c d e f g h</p>
43) _____	44) _____	45) _____



ALL-STAR












TEST




All-Star Test

The All-Star Test is worth 500 points! It's white turn to move. White can checkmate black in two moves. Write down white's moves in chess notation.


 <p>1) _____</p>	 <p>2) _____</p>	 <p>3) _____</p>
 <p>4) _____</p>	 <p>5) _____</p>	 <p>6) _____</p>
 <p>7) _____</p>	 <p>8) _____</p>	 <p>9) _____</p>

♔♕♖♗♘♙ All-Star Test ♚♛♜♝♞♟♠


It's white turn to move. White can checkmate black in two moves. Write down white's moves in chess notation. (Hint: Set up a chessboard and try out the different variations).




10) _____




11) _____




12) _____




13) _____




14) _____




15) _____



16) _____



17) _____



18) _____

All-Star Test

It's white turn to move. White can checkmate black in two moves. Write down white's moves in chess notation. (Hint: Set up a chessboard and try out the different variations).

19) _____

20) _____

21) _____

22) _____

23) _____

24) _____










25) _____

26) _____

27) _____

All-Star Test

It's white turn to move. White can checkmate black in three moves. Write down white's moves in chess notation. (Hint: Set up a chessboard and try out the different variations).


 <p style="text-align: center;">a b c d e f g h</p>	 <p style="text-align: center;">a b c d e f g h</p>	 <p style="text-align: center;">a b c d e f g h</p>
28) _____	29) _____	30) _____
 <p style="text-align: center;">a b c d e f g h</p>	 <p style="text-align: center;">a b c d e f g h</p>	 <p style="text-align: center;">a b c d e f g h</p>
31) _____	32) _____	33) _____
 <p style="text-align: center;">a b c d e f g h</p>	 <p style="text-align: center;">a b c d e f g h</p>	 <p style="text-align: center;">a b c d e f g h</p>
34) _____	35) _____	36) _____




All-Star Test




It's white turn to move. White can checkmate black in three moves. Write down white's moves in chess notation. (Hint: Set up a chessboard and try out the different variations).




37) _____




38) _____




39) _____




40) _____




41) _____




42) _____



43) _____



44) _____



45) _____

 **Congratulations!** 

You have completed the All-Star Test. Turn in this book to your Chessmaster and have them grade each section. If you passed, they will fill in this Certificate declaring your "Chess Club All-Star Status!"



Certificate of
Achievement

This certificate of achievement awards the bearer:


**their official Chess Club All-Star Status after
successfully completing the All-Star Book and Test.**

**You have worked hard, and deserve recognition for
this incredible accomplishment. Congratulations,
you've earned it!**

(Chessmaster Signature)

(Date)







Super Secret Notes

This Book Belongs To:
<u>Name:</u>
<u>School:</u>
<u>Grade:</u>

♔ Total Bonus Points ♔





ALL-STAR



BOOK

